

Name \_\_\_\_\_ Second Grade

**AMI  
Day  
Work**

**Day #10**

**Walnut Ridge Elementary**

**Alternative Method of Instruction Verification Form**

**Day 6** \_\_\_\_\_ **Day 7** \_\_\_\_\_ **Day 8** \_\_\_\_\_ **Day 9** \_\_\_\_\_ **Day 10**

**This form certifies that your child completed work for the designated day. This will allow your child to receive attendance credit for this day. In the event it is not completed, your child will receive an unexcused absence.**

**My child, \_\_\_\_\_ completed all work assigned for Day \_\_\_\_\_.**

**My child also worked on the following website:**

\_\_\_\_\_.

**Parent's Signature** \_\_\_\_\_ **Date** \_\_\_\_\_

# Y as a Vowel

Yy

**Directions:** Say the name of each picture. Circle the words in the boxes that have the same **y** as a vowel sound.




candy

handy	yam	Mandy	year	yet
yo-yo	yuck	dandy	yoke	yarn



spy

cyst	fly	my	bean	spry
by	buy	cry	try	bye



sky

fry	pry	retry	ply	why
year	try	play	hay	fray




lady

baby	tray	penny	wake	cry
yarn	yes	buggy	lazy	ray

# Y as a Vowel

Yy


**Directions:** Say the name of each picture. Write the correct word in the space provided to finish the sentence.



pony



cry



fly



July

1. The baby started to \_\_\_\_\_.

2. She swatted a \_\_\_\_\_.

3. The girl loved her \_\_\_\_\_.

4. It was the 4th of \_\_\_\_\_.

# Kerry Kangaroo Hops

by ReadWorks



Kerry Kangaroo was growing up. Mama Kangaroo let him out of her pouch.

"You are getting big," said Mama. "Big kangaroo kids need to learn to hop."

Kerry tried out his strong legs and big feet. He hopped a few times. He hopped and hopped. He hopped away from Mama. He hopped here and there. He even hopped with his eyes closed!

Splash!

Kerry hopped right into a water hole! Mama Kangaroo helped Kerry out.

"That is too much hopping for one day!" cried Kerry.

He hopped back into his cozy pouch. He was tired. He fell fast asleep.



Name: \_\_\_\_\_ Date: \_\_\_\_\_

1. What is Kerry Kangaroo ready to learn at the beginning of this passage?

- A. how to dance
- B. how to find food
- C. how to hop

2. Where does Kerry Kangaroo sleep?

- A. in Mama Kangaroo's pouch
- B. in a kangaroo nest
- C. in a water hole

3. Kerry Kangaroo most likely hops into a water hole because he didn't see it. Which sentence tells us this is true?

- A. "He hopped away from Mama."
- B. "He even hopped with his eyes closed!"
- C. "'That is too much hopping for one day!' cried Kerry"

4. What is "Kerry Kangaroo Hops" mainly about?

- A. why Kerry Kangaroo hops into a water hole
- B. how Mama Kangaroo takes care of Kerry Kangaroo
- C. Kerry Kangaroo learning to hop for the first time

5. What does Kerry Kangaroo have that helps him hop?

---

---

---

---

---

---

---

---

6. What did you learn from "Kerry Kangaroo Hops"?

---

---

---

---

---

---

---

---

**7. Class Discussion Question:** Explain why Kerry Kangaroo is tired and falls asleep at the end of the passage.

---

---

---

---

---

---

---

---

**8.** Draw a picture of Kerry Kangaroo as he practices hopping.



Day 10

Name \_\_\_\_\_



edHelper.com Date \_\_\_\_\_

### Addition and Subtraction

Write the sum or difference.

1. $\begin{array}{r} 56 \\ + 24 \\ \hline \end{array}$	2. $\begin{array}{r} 77 \\ - 39 \\ \hline \end{array}$	3. $\begin{array}{r} 37 \\ + 46 \\ \hline \end{array}$	4. $\begin{array}{r} 65 \\ - 57 \\ \hline \end{array}$	5. $\begin{array}{r} 14 \\ + 66 \\ \hline \end{array}$
6. $\begin{array}{r} 40 \\ - 31 \\ \hline \end{array}$	7. $\begin{array}{r} 75 \\ + 17 \\ \hline \end{array}$	8. $\begin{array}{r} 97 \\ - 28 \\ \hline \end{array}$	9. $\begin{array}{r} 39 \\ + 31 \\ \hline \end{array}$	10. $\begin{array}{r} 69 \\ + 29 \\ \hline \end{array}$
11. $\begin{array}{r} 91 \\ - 27 \\ \hline \end{array}$	12. $\begin{array}{r} 74 \\ - 47 \\ \hline \end{array}$	13. $\begin{array}{r} 93 \\ - 54 \\ \hline \end{array}$	14. $\begin{array}{r} 72 \\ + 18 \\ \hline \end{array}$	15. $\begin{array}{r} 87 \\ - 38 \\ \hline \end{array}$
16. $\begin{array}{r} 86 \\ - 77 \\ \hline \end{array}$	17. $\begin{array}{r} 76 \\ + 18 \\ \hline \end{array}$	18. $\begin{array}{r} 72 \\ - 63 \\ \hline \end{array}$	19. $\begin{array}{r} 31 \\ - 22 \\ \hline \end{array}$	20. $\begin{array}{r} 60 \\ - 51 \\ \hline \end{array}$
21. $\begin{array}{r} 44 \\ - 35 \\ \hline \end{array}$	22. $\begin{array}{r} 50 \\ - 11 \\ \hline \end{array}$	23. $\begin{array}{r} 28 \\ + 52 \\ \hline \end{array}$	24. $\begin{array}{r} 70 \\ - 24 \\ \hline \end{array}$	25. $\begin{array}{r} 27 \\ + 56 \\ \hline \end{array}$