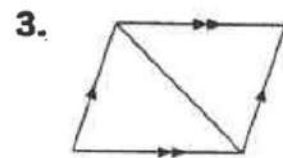
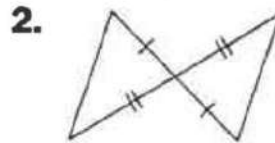
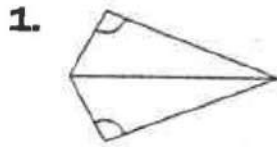
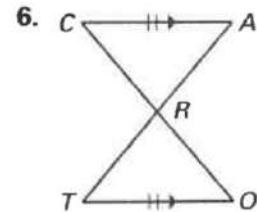
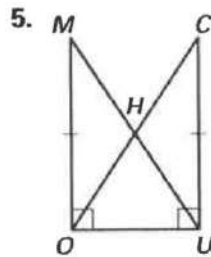
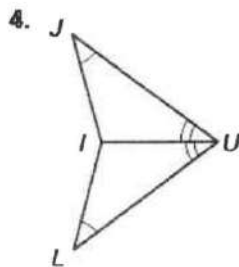


**Tell which method(s) you can use to prove that the triangles are congruent. If no method can be used, write *none*.**



**Is it possible to prove that the triangles are congruent? If so, state the postulate or theorem you would use. Explain your reasoning.**



**State the third congruence that must be given to prove that  $\triangle DEF \cong \triangle MNO$ , using the indicated postulate or theorem.**

1. Given:  $\overline{EF} \cong \overline{NO}$   
 $\angle N \cong \angle E$

Method: ASA Congruence Postulate

2. Given:  $\overline{EF} \cong \overline{NO}$   
 $\angle N \cong \angle E$

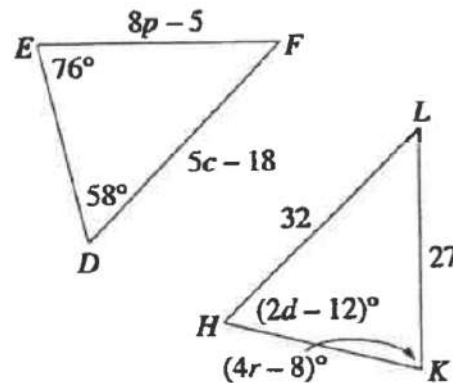
Method: AAS Congruence Theorem

3. Given:  $\angle D \cong \angle M$   
 $\angle F \cong \angle O$

Method: ASA Congruence Postulate

**For Questions 8–11, use the figure at the right in which  $\triangle DEF \cong \triangle HKL$ .**

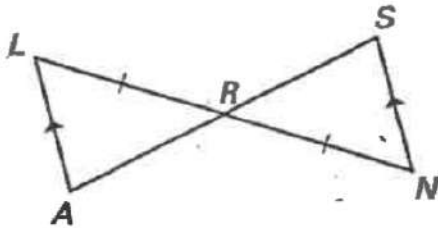
8. Find the value of  $d$ .
9. Find the value of  $p$ .
10. Find the value of  $c$ .
11. Find the value of  $r$ .



Complete the proof by supplying the reasons.

8. Given:  $\overline{LA} \parallel \overline{SN}$ ,  $\overline{LR} \cong \overline{NR}$

Prove:  $\triangle LAR \cong \triangle NSR$

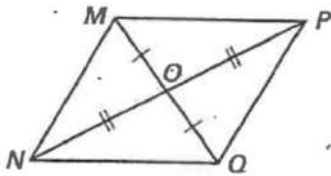


Statements	Reasons
1. $\overline{LA} \parallel \overline{SN}$	1. ?
2. $\angle L \cong \angle N$	2. ?
3. $\overline{LR} \cong \overline{NR}$	3. ?
4. $\angle LRA \cong \angle NRS$	4. ?
5. $\triangle LAR \cong \triangle NSR$	5. ?

11. Given:  $O$  is the midpoint of  $\overline{MQ}$ .

$O$  is the midpoint of  $\overline{NP}$ .

Prove:  $\triangle MON \cong \triangle QOP$



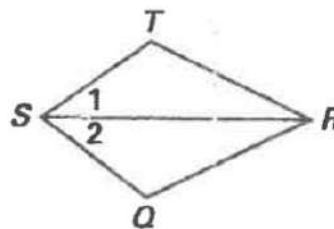
Statements	Reasons
1. $O$ is the midpoint of $\overline{MQ}$ .	1. ?
2. ?	2. Definition of midpoint
3. ?	3. Given
4. ?	4. Definition of midpoint
5. $\angle MON \cong \angle QOP$	5. ?
6. $\triangle MON \cong \triangle QOP$	6. ?

7. Write a two-column proof.

Given:  $\overrightarrow{SR}$  bisects  $\angle TSQ$ ,

$\angle T \cong \angle Q$

Prove:  $\triangle RTS \cong \triangle RQS$



Statements	Reasons
1. _____	1. Given
2. _____	2. Given
3. _____	3. _____
4. _____	4. _____
5. _____	5. _____