

Geometry

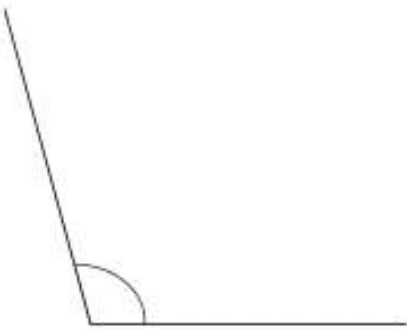
Name _____

Warm Up

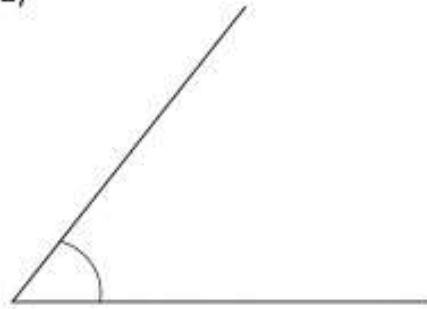
Aug 21, 2020

Measure and classify each angle.

1)



2)



Geometry

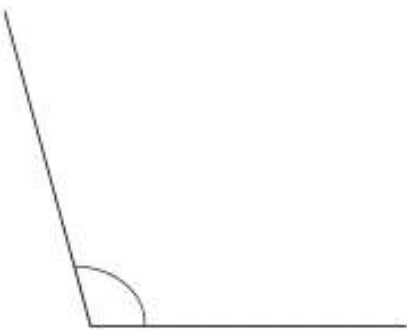
Name _____

Warm Up

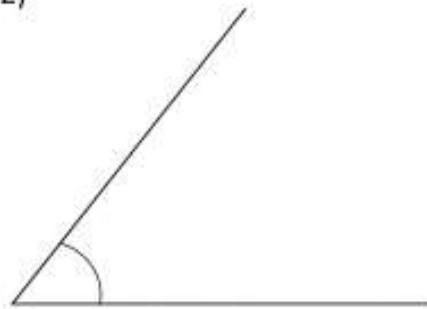
Aug 21, 2020

Measure and classify each angle.

1)



2)



Using your protractor draw an angle with the given measure. Classify the angle as obtuse, acute, right.

145°

20°

Using your protractor draw an angle with the given measure. Classify the angle as obtuse, acute, right.

145°

20°