

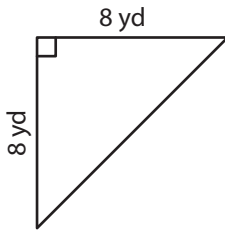
Name : \_\_\_\_\_

T1L1S1

## Area of a Triangle

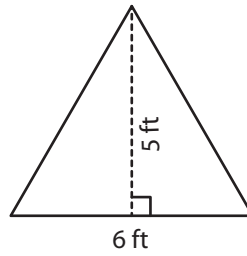
Find the area of each triangle.

1)



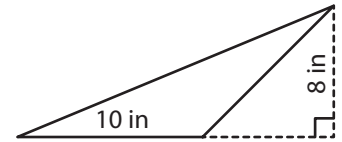
Area =

2)



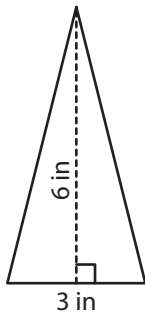
Area =

3)



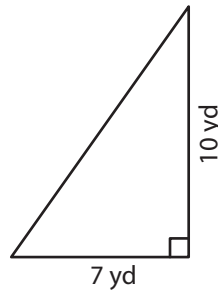
Area =

4)



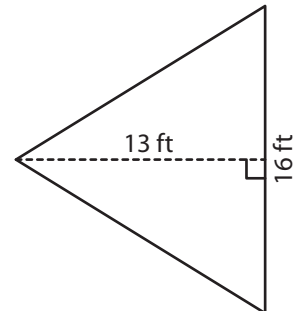
Area =

5)



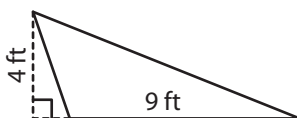
Area =

6)



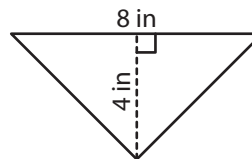
Area =

7)



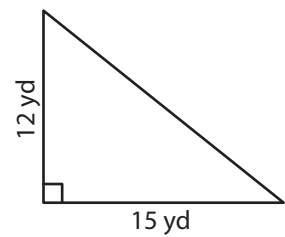
Area =

8)



Area =

9)



Area =

Name : \_\_\_\_\_

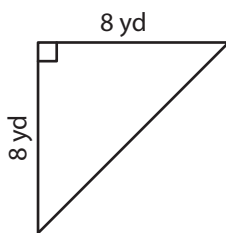
## Answer key

T1L1S1

### Area of a Triangle

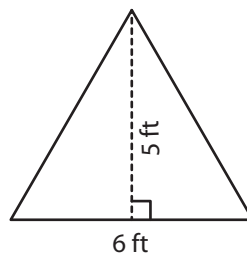
Find the area of each triangle.

1)



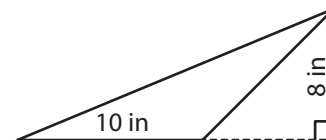
Area = **32 yd<sup>2</sup>**

2)



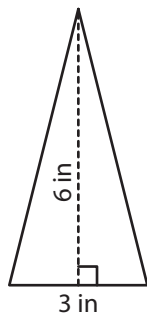
Area = **15 ft<sup>2</sup>**

3)



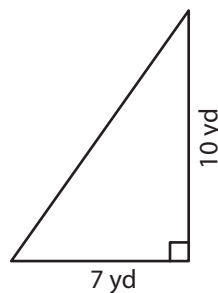
Area = **40 in<sup>2</sup>**

4)



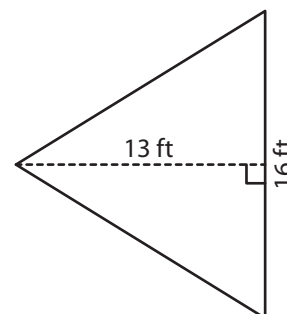
Area = **9 in<sup>2</sup>**

5)



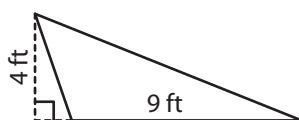
Area = **35 yd<sup>2</sup>**

6)



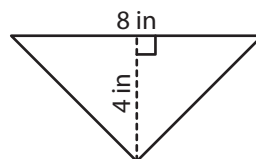
Area = **104 ft<sup>2</sup>**

7)



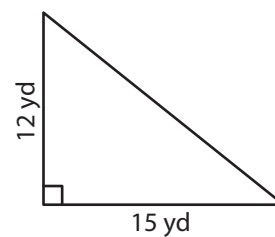
Area = **18 ft<sup>2</sup>**

8)



Area = **16 in<sup>2</sup>**

9)



Area = **90 yd<sup>2</sup>**