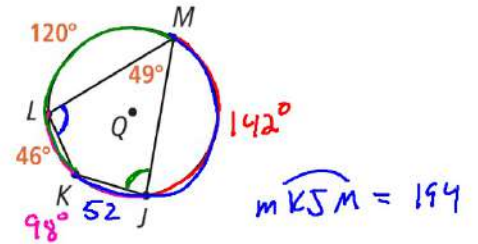


5. In  $\odot Q$ , find  $m\widehat{JL} = 98^\circ$

Enter your answer.



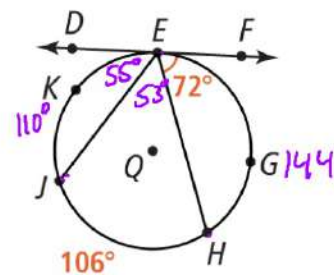
In  $\odot Q$ , find  $m\widehat{MJ} = 142^\circ$

In  $\odot Q$ , find  $m\angle KJM = 83^\circ$   
 $m\widehat{KLM} = 166$

In  $\odot Q$ , find  $m\angle KLM = 97^\circ$

9. Line  $DF$  is tangent to  $\odot Q$  at point  $E$ . Find  $m\widehat{EH}$ . 144

Enter your answer.



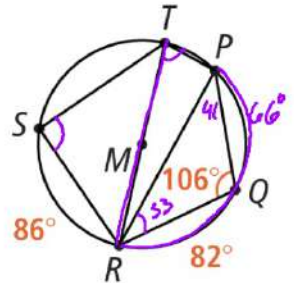
10. Line  $DF$  is tangent to  $\odot Q$  at point  $E$ . Find  $m\widehat{EJ}$ . 110

11. Line  $DF$  is tangent to  $\odot Q$  at point  $E$ . Find  $m\angle HEJ$ . 53°

12. Line  $DF$  is tangent to  $\odot Q$  at point  $E$ . Find  $m\angle DEJ$ .

13. In  $\odot M$ , find  $m\angle PRQ$ .  $= 33^\circ$

Enter your answer.



14. In  $\odot M$ , find  $m\angle PTR$ .  $= 74^\circ$

15. In  $\odot M$ , find  $m\angle RST$ .  $= 90^\circ$

16. In  $\odot M$ , find  $m\angle SRT$ .

