


Name _____


Unit 1: Addition and Subtraction 2- Step Problems

Unit 1 Test Prep


1. Melanie hoped she would get \$55 for her birthday. Her parents gave her \$26, her grandma gave her \$12 and her aunt gave her \$16. How much money did she get in all? How much more or less than \$55 did she get?

<p>How much money did Melanie get in all? \$ from her parents: _____ \$ from her grandma: _____ \$ from her aunt: _____</p>	<p>How much more or less than \$55 did she get?</p> 
---	--


2. Sage read 118 pages last week and 123 pages this week. Brooke read 126 pages last week and 119 pages this week. Who read more pages during this week and last week? How many more pages did she read?

<p>Sage read: _____ + _____</p>	<p>Who read more pages? How many more pages did she read?</p> 
<p>Brooke read: _____ + _____</p>	

3. Willow hoped she would get \$100 for her birthday. Her parents gave her \$27, her grandma gave her \$34 and her aunt gave her \$46. How much money did she get in all? How much more or less than \$100 did she get?


	
--	---

4. Declan wants to read 120 pages by the end of the week. On Monday he read 34 pages, on Tuesday he read 29 pages and on Wednesday he read 47 pages. How many pages has he read so far? How much more or less than 100 pages has he read?


	
--	---

5. Ryker read 134 pages last week and 117 pages this week. K'Yen read 128 pages last week and 132 pages this week. Who read more pages during this week and last week? How many more pages did he read?

--	--

	
--	---

- 6.
7. Kyle wants to collect 30 seashells by the end of his trip to Ocean City. On Monday he collected 16 seashells, on Tuesday and Wednesday it rained so his family didn't go to the beach, on Thursday he collected 11 seashells and on Friday he collected 13 seashells. How many seashells has he collected so far? How much more or less than 30 seashells has he collected?

	
--	---