

Name: _____

4th Grade

Snow Day Work

Day # 2

Name: _____

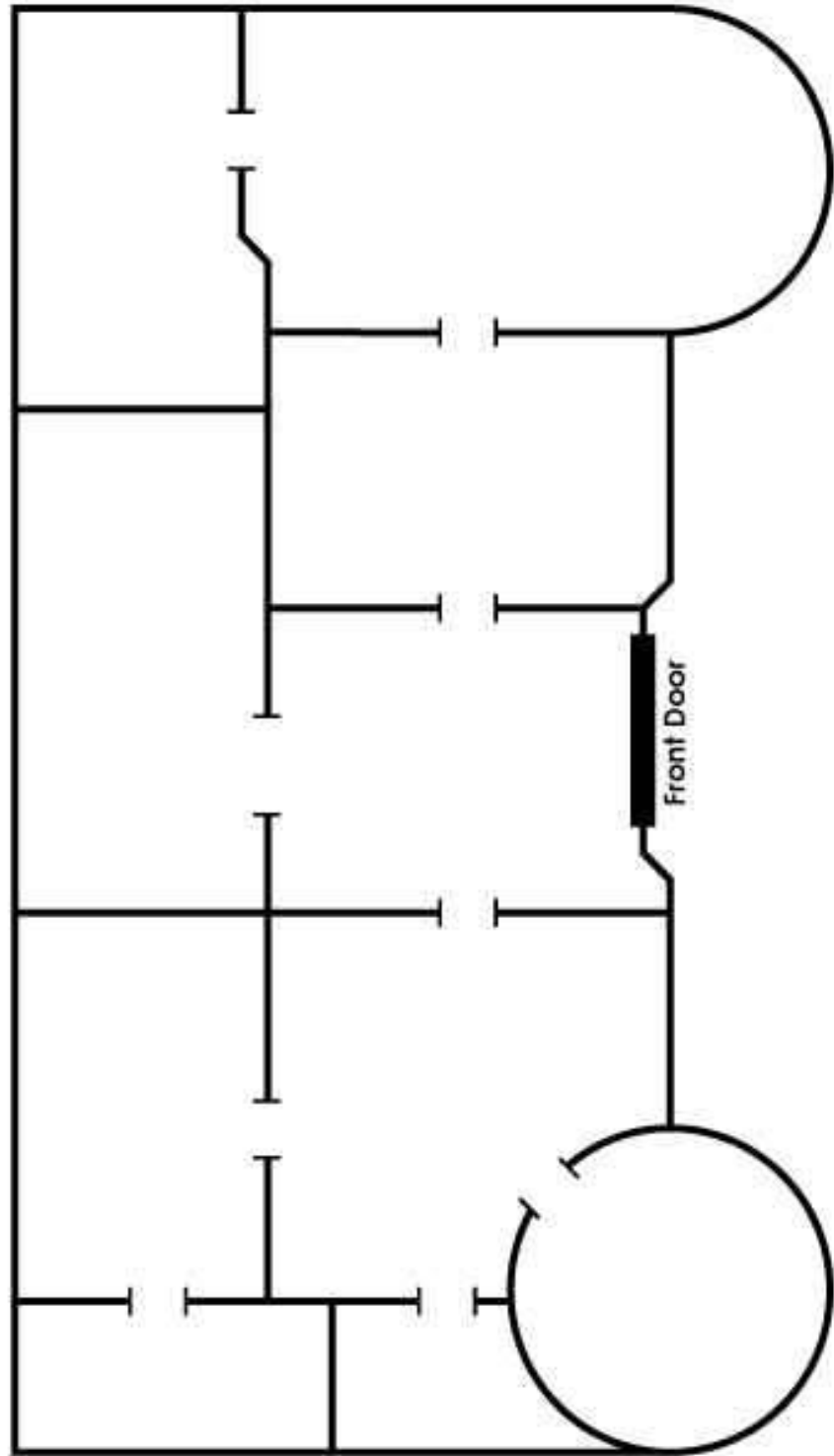
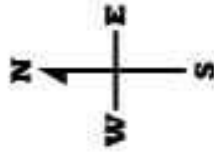
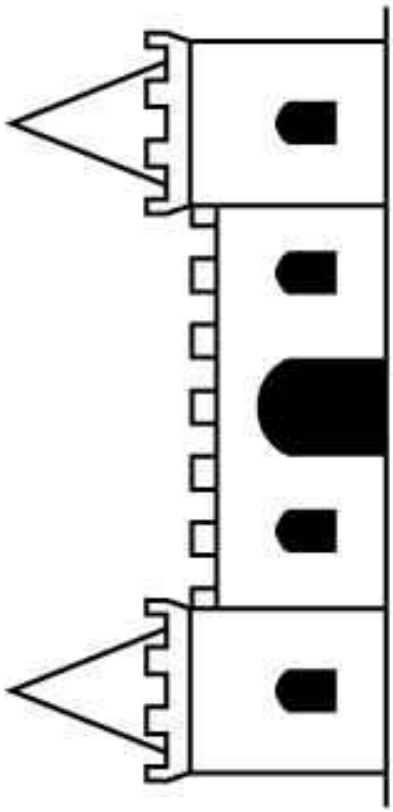
Royal Castle Floor Plan

Write your name at the top of the Royal Castle Floor Plan map and follow the directions below.

1. When you enter the castle through the front door, you are in the living room. Label this room LIVING ROOM and draw a sofa in it.
2. As you walk to the east from the living room, you enter the royal TV room. Label this room TV ROOM and draw a television in it.
3. The largest room in the castle is the Queen's bedroom. Label this room QUEEN'S BEDROOM and draw a bed in it.
4. Directly north of the Queen's bedroom is the queen's closet. Label this room QUEEN'S CLOSET and draw a dress in it.
5. Directly west of the Queen's closet is the library. Label this room LIBRARY and draw a book in it.
6. The smallest room in the castle is the bathroom. Label this room BATHROOM and draw a bathtub in it.
7. Directly east of the bathroom is the kitchen. Label this room KITCHEN and draw a stove and refrigerator.
8. The dining room is shaped like a circle. Label this room DINING ROOM and draw a table in it.
9. If you walk north from the kitchen, you enter the King's bedroom. Label this room KING'S BEDROOM and draw a bed in it.
10. If you're in the King's bedroom and look to the west, you'll see the King's closet. Label this room KING'S CLOSET and draw a shirt in it.
11. Outside the castle, just south of the front door, is a sidewalk. Draw the sidewalk leading up to the front door.
12. The King and Queen decide to build a secret room in their castle. They will hide their jewels in this room. It will be a small room that is directly east of the queen's bedroom. Draw the secret room and label it SECRET ROOM. Draw a crown in this room.



Royal Castle Floor Plan



Name: _____

A Rounding Exercise

Round to the nearest ten.

a. 308 _____

b. 4,172 _____

c. 3,995 _____

d. 31,236 _____

Round to the nearest hundred.

e. 3,451 _____

f. 6,009 _____

g. 17,127 _____

h. 9,999 _____

Round to the nearest thousand.

i. 609 _____

j. 8,500 _____

k. 150 _____

l. 21,544 _____

m. Kendra ran around the school track three times. The track is 405 meters around. Find the total number of meters she ran. Then round the answer to the nearest hundred.

total distance: _____ meters

rounded to nearest hundred: _____ meters

n. Martin lifted dumbbells in the gym, on Monday through Friday, for twenty weeks. Each day he did 25 repetitions. How many repetitions did he do over the course of twenty weeks? Then round the answer to the nearest thousand.

total repetitions: _____

rounded to nearest thousand: _____



Name: _____

Conquering Everest

by Kimberly M. Hutmacher

Mount Everest is the tallest mountain on Earth. Its peak is located on the border between Nepal and Tibet in China. It is part of the great Himalayan Mountain range.

For many years, climbers tried and failed to reach the summit of Mount Everest. In 1953, the British put everything they had into giving it one more try. They hoped that their climbers would reach the top in time for the coronation of Queen Elizabeth.



Ten different climbers from all over the world were chosen to make the trek. In April and May, supplies were relayed up the mountain, and camps were set up every 1,000 to 2,000 feet.



On May 29, 1953, two of the climbers set out for the summit from their camp at 27,900 feet. On that morning, Edmund P. Hillary (from New Zealand) and Tenzig Norgay (from Nepal) accomplished one of the greatest climbing feats ever. They were the first to reach the summit of Mount Everest.

When they returned home, journalists kept asking the two men who reached the summit first. Each time they were asked, the response was the same: "We reached it together, as a team."

Name: _____

Conquering Everest

by Kimberly M. Hutmacher



1. What is this passage mostly about?
- a. the first people who climbed on Mount Everest
 - b. the location of Mount Everest
 - c. the first climbers to reach the top of Mount Everest
 - d. the first time Queen Elizabeth climbed Mount Everest

2. How many years ago did this story take place?
Show your work in the space to the right.

3. Read the following sentence from the article and choose the meaning for the underlined word. Use a dictionary if you don't know the answer.

They hoped that their climbers would reach the top before the coronation of Queen Elizabeth.

- a. birth
 - b. special feast held by a king or queen
 - c. birthday celebration
 - d. ceremony for crowning a king or queen
4. Where is Mount Everest Located?
- a. in Asia
 - b. in Western Europe
 - c. in North America
 - d. in South America



5. Which sentence is an opinion?
- a. On May 29, 1953, two climbers reached the summit of Mount Everest.
 - b. For many years, climbers had tried to reach the summit of Mount Everest.
 - c. Mount Everest is part of the great Himalayan Mountain range.
 - d. Edmund P. Hillary and Tenzig Norgay accomplished one of the greatest climbing feats ever.

6. Do we know the name of the first person to reach the summit of Mount Everest? Explain.

Name: _____



Conquering Everest

Vocabulary Activity

Fill in the missing letters to create a word from the article.
Then, write the full word on the line.

1. ___ u ___ i ___

clue: top of a mountain

1. _____

2. ___ ___ t ___ h

clue: from the United Kingdom

2. _____

3. ___ r ___

clue: journey on foot

3. _____

4. ___ ___ t s

clue: acts of skill, strength, or courage

4. _____

5. ___ ___ o ___ ___ n

clue: crowning of a queen or king

5. _____

6. ___ ___ p ___

clue: country in South Asia

6. _____

7. ___ ___ a ___ e d

clue: passed something along from one person to another

7. _____