

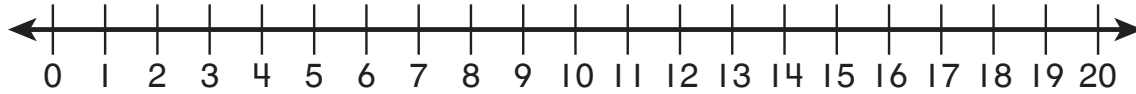
Name _____

Next Stop









Everyone must get off the train by the last stop.

Fill in the boxes at each stop.

Use the number line to count back or count on.



Number of People

	On Train		Getting Off		Left
1.	 <input type="text" value="20"/>	—	<input type="text" value="2"/>	=	<input type="text" value="18"/>
2.	 <input type="text" value="18"/>	—	<input type="text"/>	=	<input type="text"/>
3.	 <input type="text"/>	—	<input type="text"/>	=	<input type="text"/>
4.	 <input type="text"/>	—	<input type="text"/>	=	<input type="text"/>
5.	 <input type="text"/>	—	<input type="text"/>	=	<input type="text"/>
6.	 <input type="text"/>	—	<input type="text"/>	=	<input type="text"/>
7.	 <input type="text"/>	—	<input type="text"/>	=	<input type="text"/>
8.	 <input type="text"/>	—	<input type="text"/>	=	<input type="text" value="0"/>