



Work Place Instructions 2C Cover Up

Each pair of players needs:

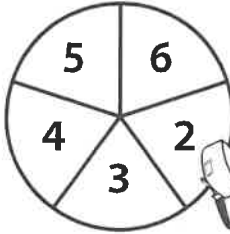
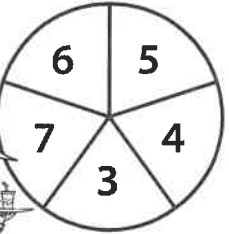
- 1 spinner overlay to share
- their own 2C Cover Up Record Sheets


- 1 Players take turns spinning the same spinner. The player with the higher spin goes first.
- 2 The first player spins both spinners and draws an array with those dimensions on their grid.
- 3 The player explains to their partner how to find the product represented by the array (the area of the array).
- 4 The player writes the total product on the array and writes an equation on the line under the grid.

Unit 2 Module 2 | Session 5 *a few class sets, stored in the Work Place Bin*


NAME _____ DATE _____

2C Cover Up Record Sheet


×




Player 1 Sam



First Array 3 × 4 = 12


Second Array _____

Third Array _____

Fourth Array _____

Total _____

Player 2 Tomie




First Array _____

Second Array _____

Third Array _____

Fourth Array _____

Total _____


Bridges in Mathematics Grade 3 Teacher Masters  © The Math Learning Center | mathlearningcenter.org

- 5 Play continues until each player has had four turns.
If a player spins dimensions for an array that will not fit on the grid, they lose that turn.
- 6 At the end of the game, players add their products. The player whose total is closest to 100 wins.

NAME _____

DATE _____

 **2C Cover Up Record Sheet**



Player 1 _____

Player 2 _____

First Array _____

First Array _____

Second Array _____

Second Array _____

Third Array _____

Third Array _____

Fourth Array _____

Fourth Array _____

Total

Total

I spun _____ and _____.
number number

_____ X _____ = _____.
number number number

The area of my array is _____.
number

_____ + _____ + _____ = _____.
number number number number

My total area is _____ closer to 100!
number you are/I am



I can't fit my array in the space I have left,
so I will make 2 arrays.

$$\frac{\text{number}}{\text{number}} \times \frac{\text{number}}{\text{number}} = \frac{\text{number}}{\text{number}}$$

plus

$$\frac{\text{number}}{\text{number}} \times \frac{\text{number}}{\text{number}} = \frac{\text{number}}{\text{number}}$$

